

# The Limit and Limit Computations

**Goal:**

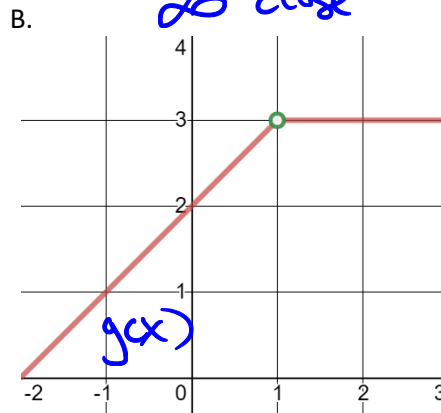
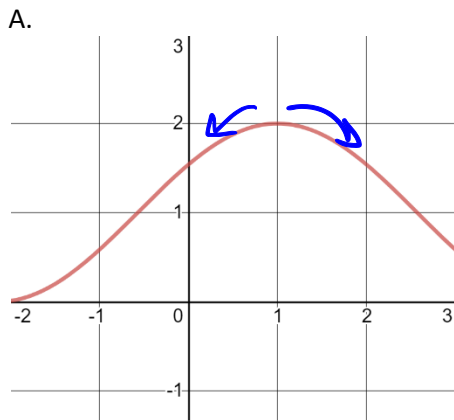
- Can describe a limit as a shrinking ball.
- Can determine a limit from a graph and using a table of values.
- Can determine a limit algebraically by factoring and using the conjugate.

**Terminology:**

- Limit
- Indeterminate form

characteristics: slope  
 predictable: trends  
 value @  $x=1$  vs  
 value near  $x$

Using the graphs and table of values. Describe the behaviour around  $x = 1$ .



C.

$x$	$f(x)$
0	7
0.9	7.5
0.95	7.86
0.9999	7.9648
1	9
1.0001	9.0431
1.05	9.14
1.1	9.2
2	10

Your description		
Class description @ $x=1$ we have a max $f(x)=2$	$g(1)$ is undefined $g(x) \rightarrow 3$ as $x \rightarrow 1$ it does not approach at same rate	on the left side we $\rightarrow 8$ and on the right we approach 9

What you are describing is the basic definition of the limit. That is:

$\lim_{x \rightarrow 1} f(x) = L \rightarrow$  some # that  $f(x)$   
 approaches from  
 both sides

One way to think of the limit

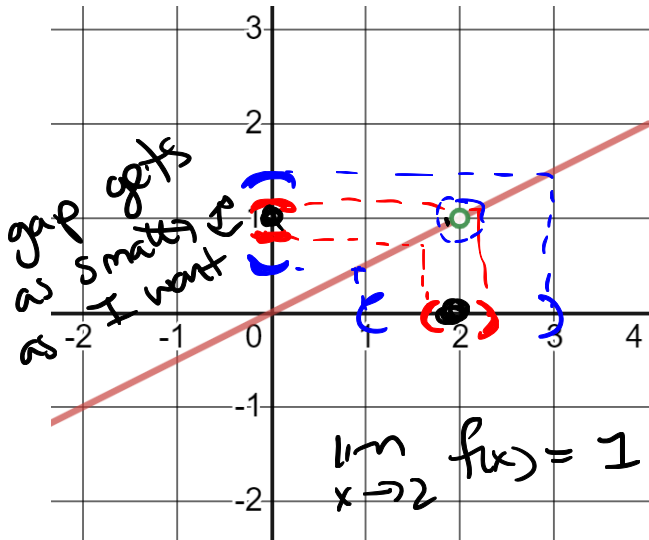
$$\lim_{x \rightarrow c} f(x) = L$$

As the idea that **small changes in  $x$  around the value  $c$  will result in small changes in  $y$  around the value  $L$** . In fact, we define the limit using this idea:

**Definition:** We say  $\lim_{x \rightarrow c} f(x) = L$  if when we pick values close enough to  $c$  (in the domain of  $f$ ) that all of the values of  $f(x)$  will be close to  $L$  **with the possible exception of the value of  $f$  at  $x = c$**

Consider the function  $f(x) = \frac{x^2 - 2x}{2x - 4}$  as we let  $x \rightarrow 2$

$$\frac{5}{10} \quad \frac{5}{0} \quad \frac{0}{0}$$



**Definition:** We say that that  $f(2) = \frac{0}{0}$  which is **indeterminate** because

$$\frac{0}{0} = n \Leftrightarrow 0 = n - 0$$

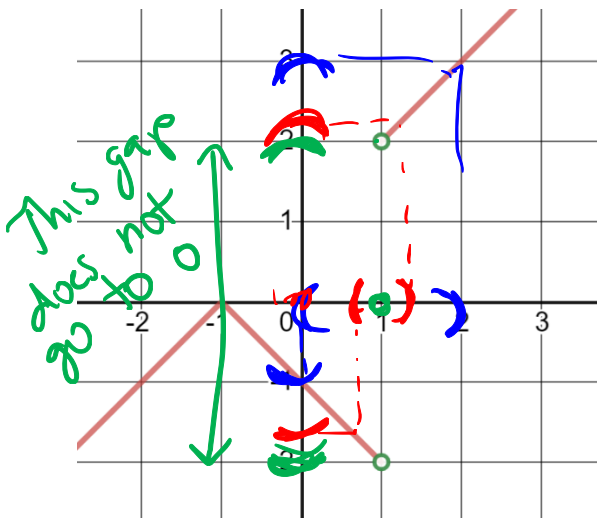
NO  $n \in \mathbb{R}$  will work

$$\frac{0}{0} = m \Leftrightarrow 0 = m - 0$$

every  $m \in \mathbb{R}$  works

Compare this to the function  $g(x) = \frac{|x^2 - 1|}{x - 1}$  as we let  $x \rightarrow 1$

$g(1) = \text{undefined}$   
 $\lim_{x \rightarrow 1} g(x) = \text{DNE}$



Again, we have that  $g(1) = \frac{0}{0}$

$$\lim_{x \rightarrow 1} g(x) = \text{DNE}$$

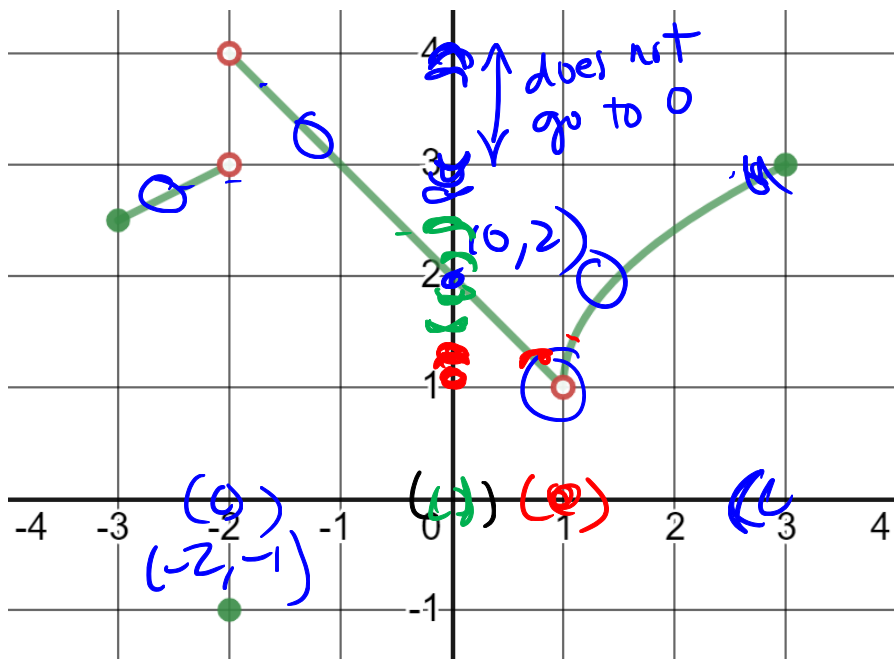
Does not exist

for a small  $\Delta x$  we get a large  $\Delta y \geq 2$

When we use the graph to determine a limit, we can imagine a ball centered around the limit point that is getting smaller and smaller around the limit point but still includes other parts of the function.

If we can make a ball arbitrarily small we say the limit exists, but if we can shrink it so the ball contains no other parts of the function (on either side), then the limit does not exist as this would mean a large change in  $y$  relative to a small change in  $x$ .

**Practice:** Given the function  $f(x)$  below determine the following limits. Note that the domain is  $x \in [-3, 3], x \neq 1$



a.  $f(-2) = -1$

b.  $f(0) = 2$

c.  $f(1) = \text{undefined}$

d.  $\lim_{x \rightarrow -2} f(x) = \text{DNE}$

e.  $\lim_{x \rightarrow 0} f(x) = 2$

f.  $\lim_{x \rightarrow 1} f(x) = 1$

$\star f(x) \rightarrow 1$   
from above

g. For what values of  $c$  is  $\lim_{x \rightarrow c} f(x) \in \mathbb{R}$

$c \neq -2$

h. For what values of  $c$  does  $\lim_{x \rightarrow c} f(x) = f(c)$

$c \neq -2, 1$

i.  $\lim_{x \rightarrow 3} f(x) = 3$

$\star f(x) \rightarrow 3$   
from below



When the limit exists, we can extend this to other similar functions using limit properties. We start with the assumptions that:

$\lim_{x \rightarrow c} f(x) = L$  and  $\lim_{x \rightarrow c} g(x) = M$

$f(c) \sim L$   
 $g(c) \sim M$

Where  $L, M \in \mathbb{R}$  (they exist and are some number), then:

1.  $\lim_{x \rightarrow c} (f(x) + g(x)) = \lim_{x \rightarrow c} f(x) + \lim_{x \rightarrow c} g(x) = L + M$

2.  $\lim_{x \rightarrow c} (f(x) - g(x)) = \lim_{x \rightarrow c} f(x) - \lim_{x \rightarrow c} g(x) = L - M$

3.  $\lim_{x \rightarrow c} k \cdot f(x) = k \cdot \lim_{x \rightarrow c} f(x) = k \cdot L$

4.  $\lim_{x \rightarrow c} (f(x) \cdot g(x)) = \lim_{x \rightarrow c} f(x) \cdot \lim_{x \rightarrow c} g(x) = L \cdot M$

5.  $\lim_{x \rightarrow c} \frac{f(x)}{g(x)} = \frac{\lim_{x \rightarrow c} f(x)}{\lim_{x \rightarrow c} g(x)} = \frac{L}{M}, \quad M \neq 0$

$\lim_{x \rightarrow c} \sin(f(x)) = \sin\left(\lim_{x \rightarrow c} f(x)\right)$

6.  $\lim_{x \rightarrow c} g(f(x)) = g\left(\lim_{x \rightarrow c} f(x)\right) = g(L)$  where  $g$  is a "regular" function whose domain includes  $L$  **\*\***(more on this tomorrow)

The proof of these requires a more precise definition of the limit, but we should be able to justify these to when we think of the limit as an approximation to the value of the function.

$\lim_{x \rightarrow c} f(x) \approx f(c)$

So, all these arithmetic operations should hold when we combine approximations (assuming the approximation is good, ie. The limit exists)

We can also compute limits without their graph or a table by using algebraic operations. Namely factoring and using the conjugate.

Consider the limit:

if  $p(2) = q(2) = 0$

we know  $(x-2)$  is a factor of  $p, q$

$$\lim_{x \rightarrow 2} \frac{p(x)}{q(x)} = \frac{x^2 - x - 2}{x^2 - 5x + 6} = \frac{4 - 2 - 2}{4 - 10 + 6} = \frac{0}{0}$$

$$\lim_{x \rightarrow 2} \frac{(x/2)(x+1)}{(x/2)(x-3)} = \frac{\lim_{x \rightarrow 2} x+1}{\lim_{x \rightarrow 2} x-3} = \frac{3}{-1} = -3$$

Evaluate the limit

$$\lim_{x \rightarrow 1} \frac{\sqrt{x+3}-2}{x-1} = \frac{\sqrt{4}-2}{1-1} = \frac{0}{0} ??$$

$$\begin{aligned} \lim_{x \rightarrow 1} \frac{\sqrt{x+3}-2}{x-1} \cdot \frac{\sqrt{x+3}+2}{\sqrt{x+3}+2} &= \lim_{x \rightarrow 1} \frac{x+3-4}{(x-1)(\sqrt{x+3}+2)} \\ &= \lim_{x \rightarrow 1} \frac{\cancel{x-1}}{(\cancel{x-1})(\sqrt{x+3}+2)} \\ &= \frac{1}{\sqrt{4}+2} = \frac{1}{4} \end{aligned}$$

Practice: Evaluate the following limits.

$$\frac{a}{b} + \frac{c}{d} = \frac{ad+bc}{bd} \quad \lim_{x \rightarrow -2} \frac{1}{x-2} + \frac{1}{x+2}$$

$$\frac{\frac{a}{b}}{\frac{c}{d}} = \frac{a}{b} \cdot \frac{d}{c}$$

$$\lim_{x \rightarrow 3} \frac{\sqrt{x-2}-1}{\sqrt{x+6}-3}$$

$$= \lim_{x \rightarrow -2} \frac{4+x-2}{4(x-2)(x+2)}$$

$$\lim_{x \rightarrow 3} \frac{\sqrt{x-2}-1}{\sqrt{x+6}-3} \cdot \frac{\sqrt{x-2}+1}{\sqrt{x-2}+1} = \frac{\sqrt{x+6}-3}{4}$$

$$= \lim_{x \rightarrow -2} \frac{\cancel{x-2}}{(\cancel{x+2})(x-2)4}$$

$$= \lim_{x \rightarrow 3} \frac{(\cancel{x-2}-1)(\sqrt{x+6}+3)}{(\cancel{x+6}-9)(\sqrt{x-2}+1)}$$

$$= \frac{1}{-4 \cdot 4} = -\frac{1}{16}$$

$$= \frac{\sqrt{9}+3}{\sqrt{1}+1} = \frac{6}{2} = 3$$

Practice Problems: 2.1: # 1-16 (select), 21-25, 33-36, 43, 45-48 (select)

Textbook Readings: Page 55-61

Workbook Practice: Page 37-49

Next Day: Squeeze Theorem and Infinite Limits

